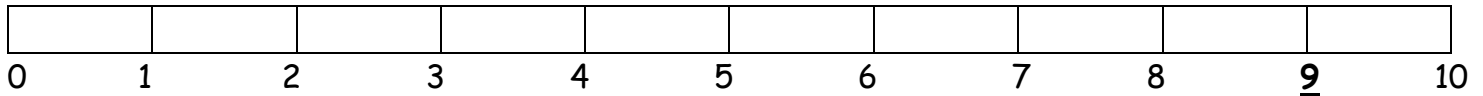


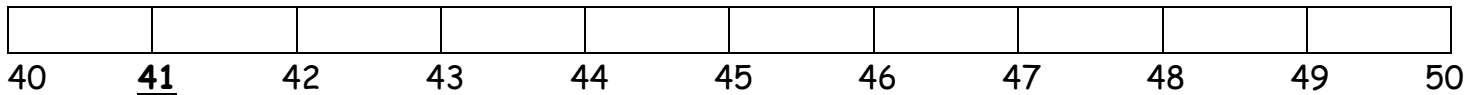
Име: _____

ЗАОКРУЖУВАЊЕ НА НАЈБЛИСКАТА ДЕСЕТКА

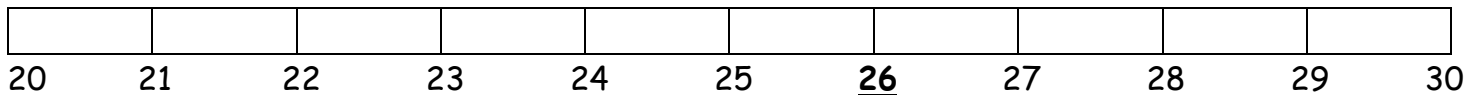
1.) Дали 9 е поблиску до 0 или 10? _____



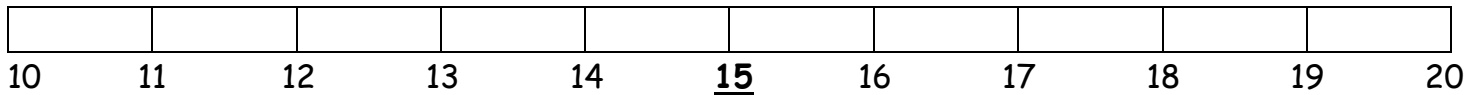
2.) Дали 41 е поблиску до 40 или 50? _____



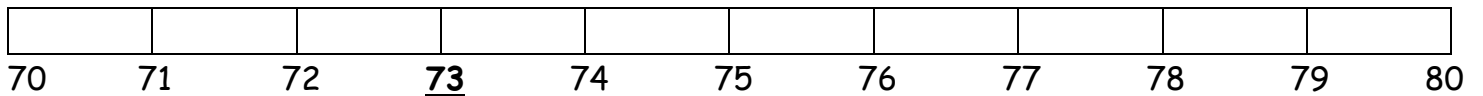
3.) Дали 26 е поблиску до 20 или 30? _____



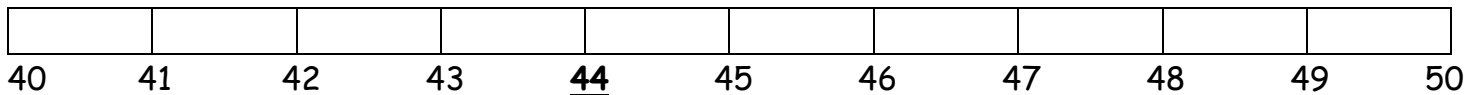
4.) Дали 15 е поблиску до 10 или 20? _____



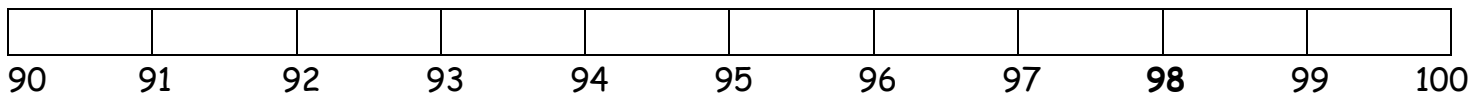
5.) Дали 73 е поблиску до 70 или 80? _____



6.) Дали 44 е поблиску до 40 или 50? _____



7.) Дали 98 е поблиску до 90 или 100? _____



Поврзи ги броевите со најблиската десетка.

50

19

30

60

16

25

31

70

76

13

63

40

38

84

10

29

20

55

49

80

44

72